

LESSON

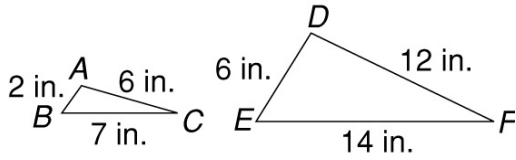
4

Proportional Relationships

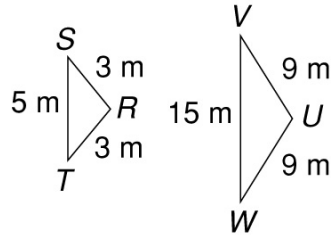
Practice B: Similar Figures and Proportions

Tell whether the triangles are similar.

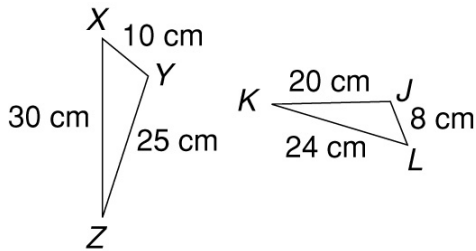
1.



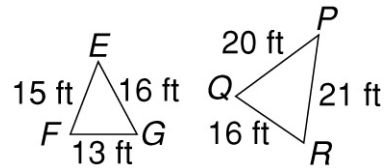
2.



3.

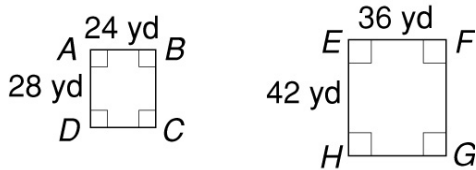


4.



Tell whether the figures are similar.

5.



6.

